

Edilene Simões

pré - primário




Escola Paroquial N. S. do P. S.  
 Aquidauana - 3 de novembro de 1969  
 Aluna - Eliane Simões Costa  
 Pré - Primário  
 Professora - Rita Terezinha e Silva

Prova mensal  
 Matéria - Sinaagem

1. Vamos escrever?

80


	e	-	a	-	r	-	a
	c		o		n		a
	e		a		r		a
	e		a		r		a
	e		a		r		a
	e		a		r		a
	a		e		d		o
	d		f		o		a
	d		o		o		a
	d		e		o		a
	u		e		o		a

Sing. - 80  
 Arit. - 90  
 Média - 85

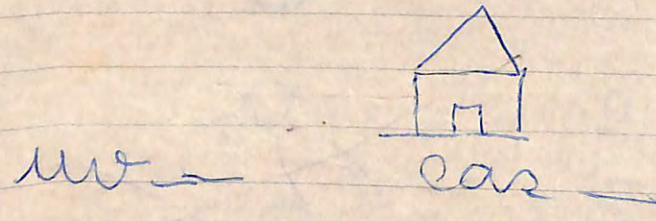


## 2) Exercícios

a) Ligar:






b) Complete  
ovo



c) Ligar  
o nome

a palavra com



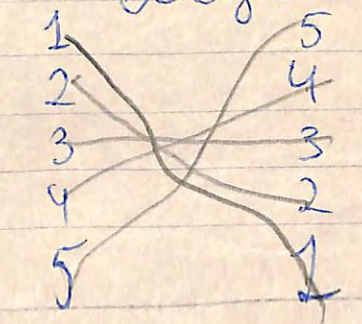
## Matéria - Aritmética

1. Somar:  
 $1 + 1 = 2$  90


$1 + 1 + 1 = 3$   
 $1 + 1 + 1 + 1 = 4$

$1 + 1 + 1 + 1 = 4$


2. Ligar:



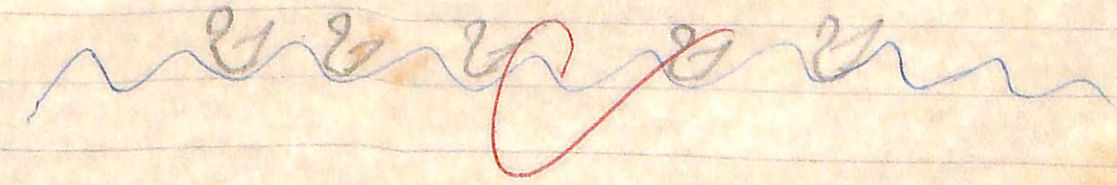
3. Quantas uvas tem nesse conjunto?



4. Numere:



5. Desenhe 5 patos na lagoa



Estimated ...

op

number 1

1 + 1 = 2

1 + 1 = 2

1 + 1 = 2

1 + 1 = 2

number 2

1 + 1 = 2

1 + 1 = 2

1 + 1 = 2

1 + 1 = 2

1 + 1 = 2

1 + 1 = 2

1 + 1 = 2

1 + 1 = 2

1 + 1 = 2

1 + 1 = 2

1 + 1 = 2


Escola Paroquial N.S do P.S  
Aquidauana - 29-9-69  
Aluno - Epilene Simões Costa  
Classe - Pré-Primário

Prova mensal

Matéria - Linguagem

1. Vamos escrever?

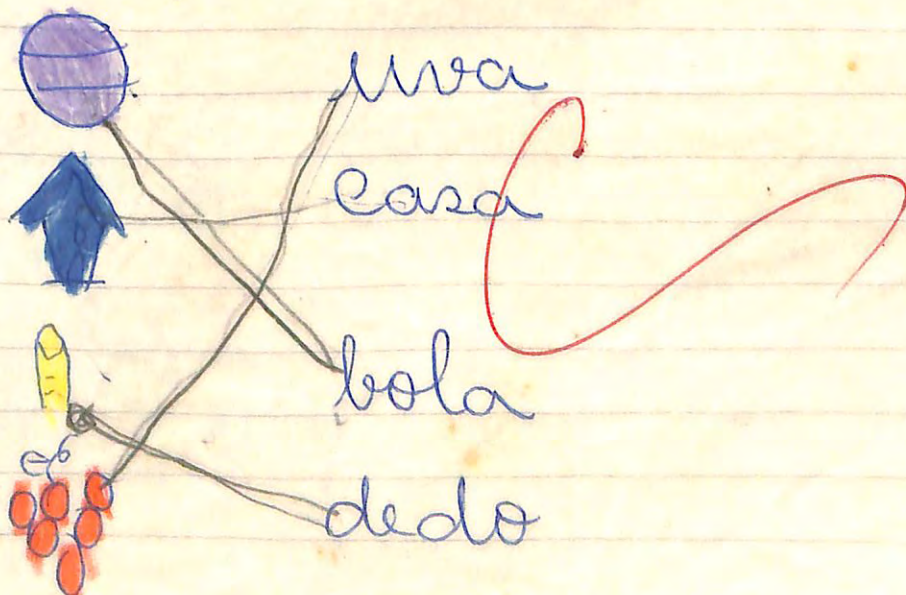
100



Exercícios

1. Ligar:

Sing - 100  
Arit - 95  
Média - 97



3. Complete:



casa



bola



uvaa

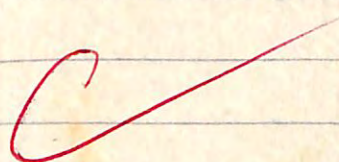
4. Ligar

Casa                      bola

ovo                        uva

uva                        casa


bola                        ovo




# Prova de Aritmética

9.5

1 - Numere



2 - Quantas bolas tem aqui?



3 - Qual o maior?



4 - Qual o menor?



5 - Sigan

